












What is the total of each row of money?

1. 
2. 
3. 
4. 
5. 
6. 
7. 
8. 
9. 
10. 

Can you compare these amounts using the > < and equal signs? Remember that the largest part of the sign is next to the largest value

	<input type="text"/>	
	<input type="text"/>	
	<input type="text"/>	

How many of each note can you see?



There are ____ 5 pound notes.

There are ____ 10 pound notes.

There are ____ 20 pound notes.

Fill in the gaps to make the statements correct.

- $£10 + £5 + 50 \text{ p} = £___ \text{ and } ___ \text{ p}$
- $£20 + £2 + 10 \text{ p} + 10 \text{ p} + 2 \text{ p} = £___ \text{ and } ___ \text{ p}$
- $£5 + £___ + 50 \text{ p} + 20 \text{ p} + 20 \text{ p} + 1 \text{ p} = £10 \text{ and } ___ \text{ p}$

How much money is there altogether?



There is £____ and ____p.