


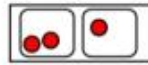
Which group of money is the odd one out?



Explain why.

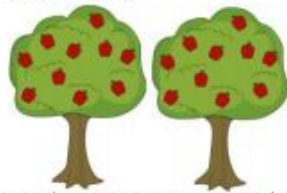
Sort into equal and unequal groups.

Equal Groups	Unequal Groups



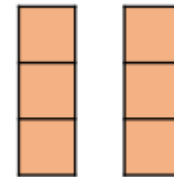
Create your own picture to go in each column.

Spot the mistake.



Alex says, "There are 10 equal groups with 2 in each group. There are ten 2s."

Has Eva shown the equal groups correctly?



Draw or use cubes to show what Eva should have done.

How can you make the groups equal?

