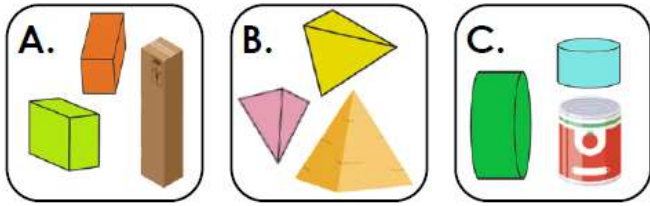


9a. Match the labels to the groups.




- Pyramids
- Cubes
- Cylinders
- Cuboids



VF

10a. Tick the shape that belongs in this group.



VF

11a. Sort the shapes into the table.

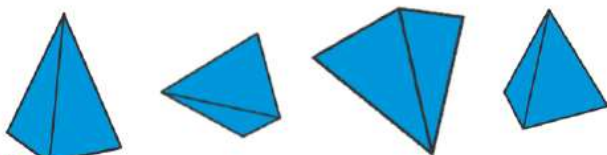
Cube	Cone	Sphere	Cuboid



VF

12a. True or false?

The 3D shapes below are all pyramids.



VF

7a. Lucas has three 3D shapes.



He says,

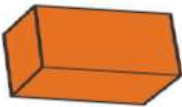


I have two cuboids and a pyramid.

Do you agree? Explain your answer.

8a. Which shape is the odd one out?

A.



B.



C.



D.



Find 2 possible answers.



PS

9a. Amy says,

C is the only shape that isn't a prism.



A.



B.



C.



D.



Do you agree? Explain your answer.



8